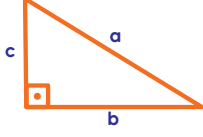


PARTİKÜL MATEMATİK

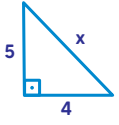
MATEMATİK CİDDİ BİR İŞTİR EĞLENCE GEREKTİRİR...

PİSAGOR BAĞINTISI

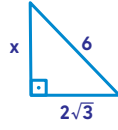


$$a^2 = b^2 + c^2$$

ÖRNEK

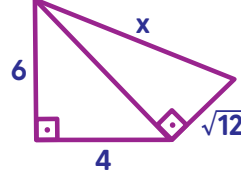


$x = ?$



$x = ?$

ÖRNEK

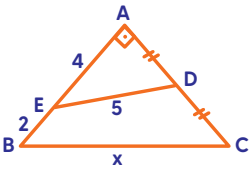


Yukarıdaki verilen şekle göre, x kaç cm'dir?

Melih Akgündüz

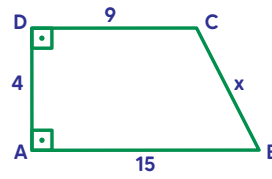
Partikül Matematik

ÖRNEK



Yukarıdaki verilen şekle göre, x kaç cm'dir?

ÖRNEK



Yukarıda verilen şekilde ABCD dik yamuktur.

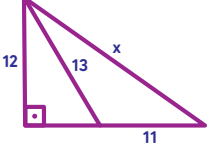
Buna göre x kaç cm'dir?

PARTİKÜL MATEMATİK

MATEMATİK CİDDİ BİR İŞTİR EĞLENCE GEREKTİRİR...

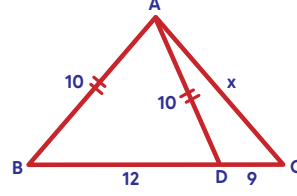
PİSAGOR BAĞINTISI

ÖRNEK



Yukarıda verilen şekle göre, x kaç cm'dir?

ÖRNEK

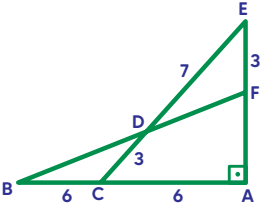


Yukarıda verilen şekle göre, x kaç cm'dir?

Melih Akgündüz

Partikül Matematik

ÖRNEK



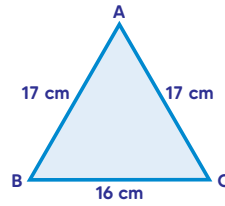
olduğuna göre |FB| kaç cm'dir?

A) 14 B) 13

C) 12

D) 11

ÖRNEK



Yukarıda verilen ABC üçgensel bölgesinin alanı kaç cm^2 'dir?

A) 120

B) 160

C) 180

D) 240